

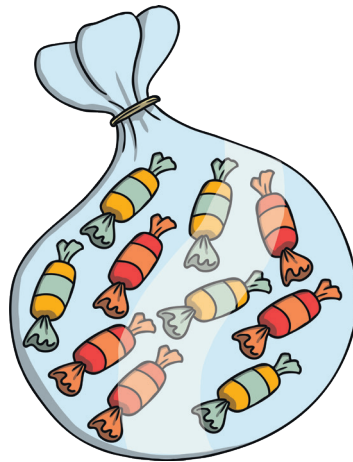
Multiples of 2 5 and 10 Word Problems

There are 10 sweets in a packet.

I have bought 17 packets.

How many sweets do I have?

Multiples of 10



Multiples of 2 5 and 10 Word Problems

There are 12 sausages in one packet.

How many sausages are in two packets?

Multiples of 2



Multiples of 2 5 and 10 Word Problems

Football stickers are sold in packets of five. I want to buy one sticker for each child in the class.

If there are 30 children, how many packets do I need to buy?

Multiples of 5



Multiples of 2 5 and 10 Word Problems

Miss Casha has 34 pairs of shoes. How many shoes are there altogether?


Multiples of 2



Multiples of 2 5 and 10 Word Problems

Owen had a birthday party and invited 10 friends.

He wants to put two blowers in each party bag. How many whistles does he need?




Multiples of 10

Multiples of 2 5 and 10 Word Problems

There are 30 children in 3C. Mrs Roberts has to mark each child's numeracy and science books tonight!

How many books does she have to mark?



Multiples of 2

Multiples of 2 5 and 10 Word Problems

Chris spends 70p on 10 party bags.

How much does each bag cost?



Multiples of 10

Multiples of 2 5 and 10 Word Problems

In year 2, there are 70 boys in two classes.

How many would be in each year 2 class?




Multiples of 2

Multiples of 2 5 and 10 Word Problems

Multiples of 5

Mr Blavoet wants to separate his class into groups of 5. There are 30 children in his class. How many groups would he need?



Multiples of 2 5 and 10 Word Problems

Multiples of 2

Miss Fraser has 34 children in her class. She wants enough laptops for children to work in pairs. How many laptops does she need?



Multiples of 2 5 and 10 Word Problems

Multiples of 5

A glove has space for five fingers. How many finger spaces are in 14 gloves?



Multiples of 2 5 and 10 Word Problems

Multiples of 5

A car seats 5 passengers. How many cars would you need to take 25 people to the shops?

